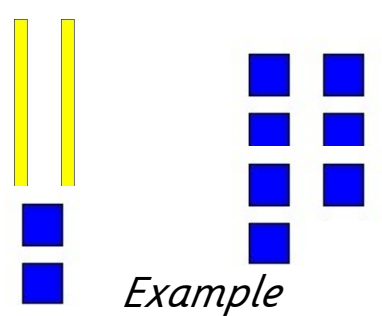



27/01/21

Name \_\_\_\_\_

LO Addition to 50 (Pictorial and Abstract)

$22 + 7 = 29$  <i>Example</i>	$14 + 6 =$	$33 + 6 =$
$25 + 5 =$	$43 + 4 =$	$21 + 3 =$
$30 + 2 =$	$9 + 6 =$	$12 + 8 =$

*Evaluation—Tick the box which tells me how you feel about the learning.*



I understand my work and do not need any help.



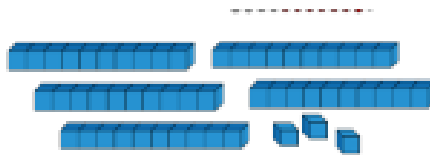
I need a little more help with my work.




I do not understand my work and need more help.



Two tens and five ones





Three tens and four ones



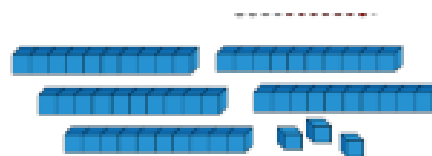
Three ones and five tens




 How many muffins are there?



Two tens and five ones




Three tens and four ones



Three ones and five tens



 How many muffins are there?

