


20.1. 21

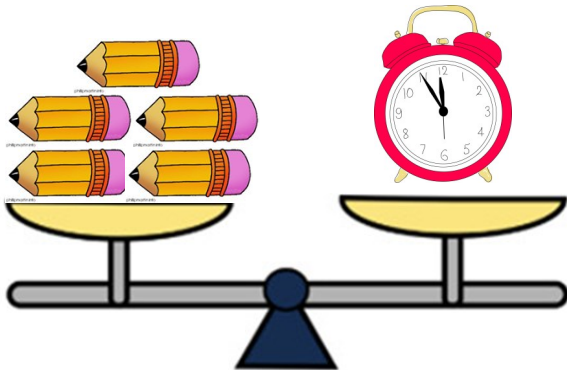
LO: To measure weight using non-standard units.

What is the weight of the pear?




_____ cubes

What is the weight of the alarm clock ?



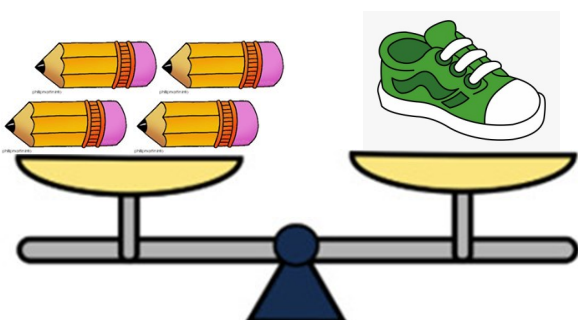
_____ pencils

What is the weight of the water melon?



_____ cubes

What is the weight of the shoe?



_____ pencils

Complete the sentences below.


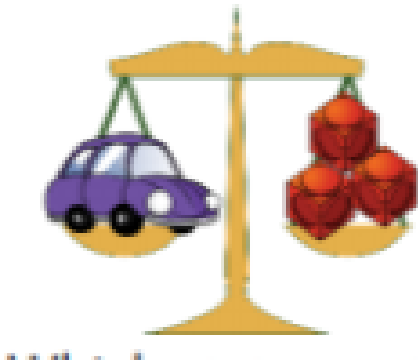


The cupcake weighs _____ cubes.



The grape weigh _____ cubes.

The cup cake is _____ than the grapes
(heavier or lighter?)



How many cube does the car weigh? _____

How many cubes does the van weigh? _____

Is the car heavier than the van? _____ (yes or no?)

Is the van heavier than the car? _____ (yes or no?)

Is the van lighter than the car? _____ (yes or no?)