





9.11.20


LO: To count coins


	=	
---	---	--

	=	
---	---	--

	=	
--	---	--

	=	
---	---	--


	=	
---	---	--

	=	
---	---	--

	=	
---	---	--

Challenge

Draw coins to make the statements correct.



10.11.20

LO: To solve money problems - pence

Jack selects three of these coins. He can use these coins more than once.




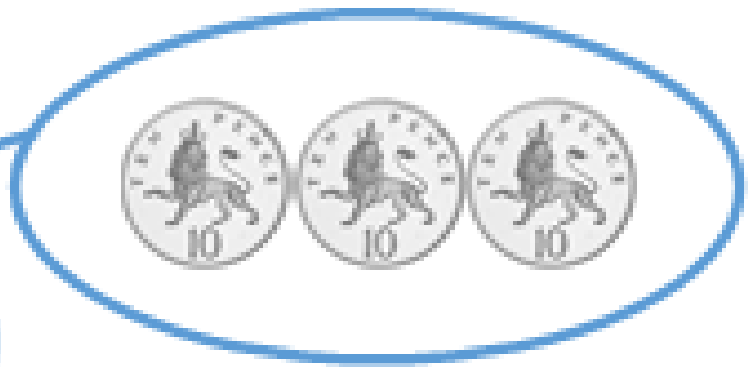
How many different totals can he make?

Different Totals:


What is the lowest total?

What is the greatest total?

Challenge



Challenge



12.11.20

LO: To count money-pounds



=



=



=



=



=



=

Challenge

Ron thinks he has £13



Is he correct?
Explain your answer.

13.11.20

LO: To count money- pounds and pence



=

___ pounds

___ pence



=

___ pounds

___ pence



=

___ pounds

___ pence



=

___ pounds

___ pence



=

___ pounds

___ pence



=

___ pounds

___ pence

Challenge

Mo has the following coins.



He thinks he has 51 p.

Explain his mistake.

Multiplication Quiz

Times Table Test 5c

Answer Check				Answer Check			
1.	3×5			13.	5×1		
2.	8×5			14.	5×4		
3.	5×5			15.	5×10		
4.	1×5			16.	5×12		
5.	6×5			17.	5×11		
6.	4×5			18.	5×8		
7.	10×5			19.	5×5		
8.	2×5			20.	5×9		
9.	7×5			21.	5×3		
10.	11×5			22.	5×6		
11.	12×5			23.	5×2		
12.	9×5			24.	5×7		

My Score:

My Score last time:

How can I improve?

